

# GCSE Maths – Geometry and Measures

## Translations as 2D Vectors

### Worksheet

NOTES



SOLUTIONS



This worksheet will show you how to work out different types of 2D translation questions. Each section contains a **worked example**, a **question with hints** and then **questions for you to work through** on your own.

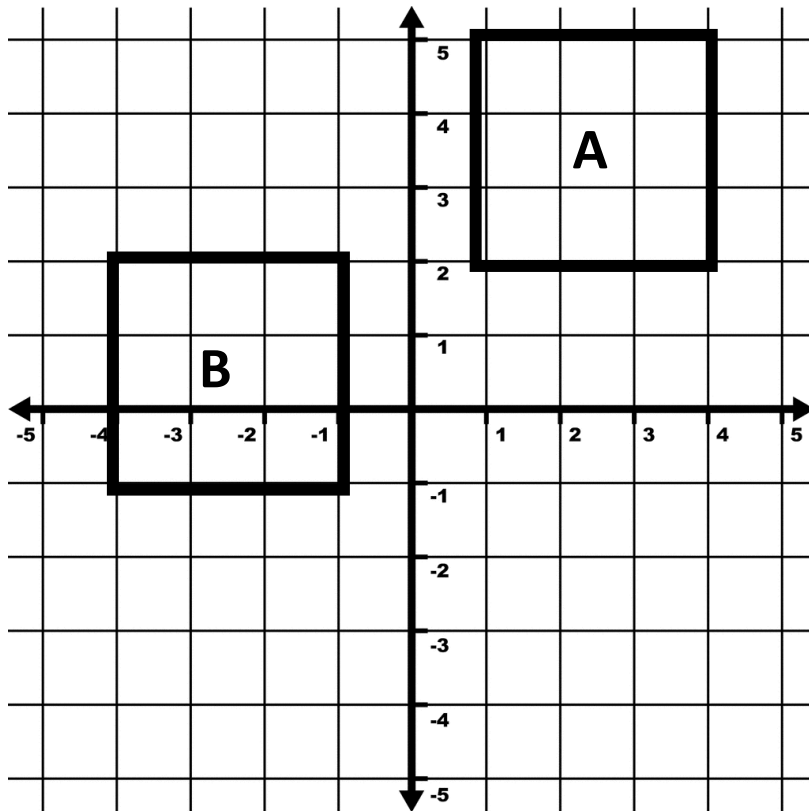
This work by [PMT Education](https://www.pmt.education) is licensed under [CC BY-NC-ND 4.0](https://creativecommons.org/licenses/by-nc-nd/4.0/)



## Section A

### Worked Example

Describe the translation of shape A to shape B as a column vector.



**Step 1:** Describe the translation of one vertex of shape A to shape B.

*The top left vertex has moved from (1,5) to (-4,2).*

**Step 2:** Work out how many units vertically and horizontally shape A has moved.

*It has moved 5 units to the left and 3 units down.*

**Step 3:** Write the translation as a column vector.

*As the vertex has moved towards the left in the x-direction, we demonstrate this using a negative sign.*

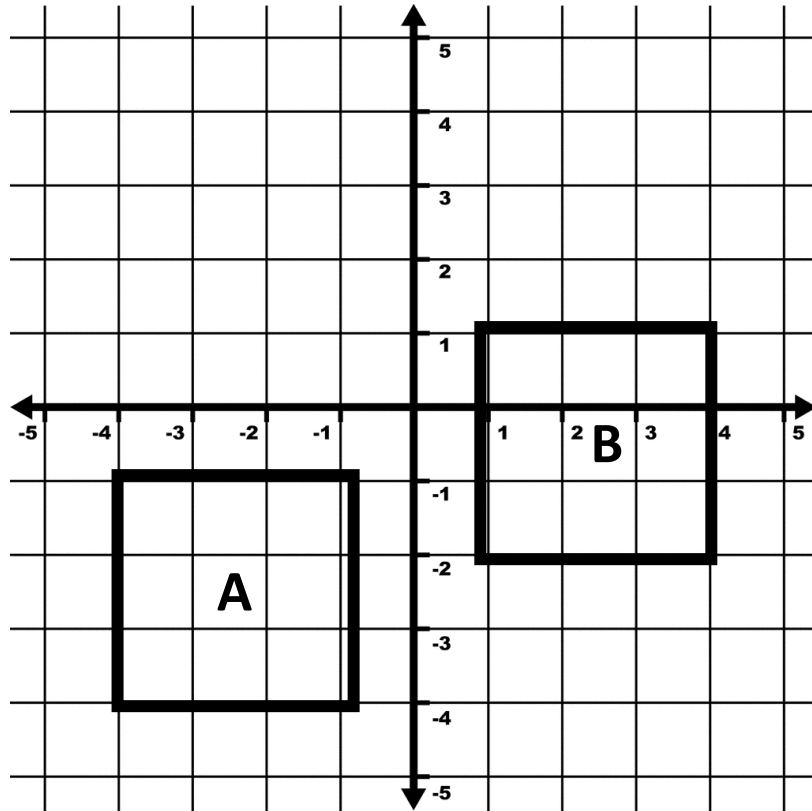
*As the vertex has moved down in the y-direction, we demonstrate this using a negative sign.*

*Column vector:  $\begin{pmatrix} -5 \\ -3 \end{pmatrix}$*



## Guided Example

Describe the translation of shape A to shape B as a column vector.



**Step 1:** Describe the translation of one vertex of shape A to shape B.

**Step 2:** Work out how many units vertically and horizontally it has moved.

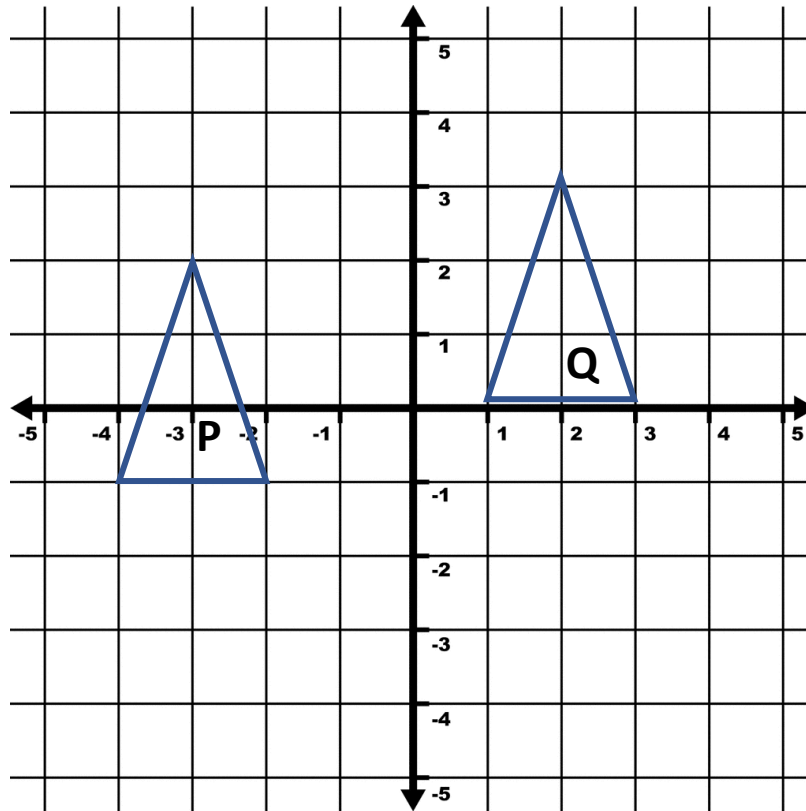
**Step 3:** Write the translation as a column vector.



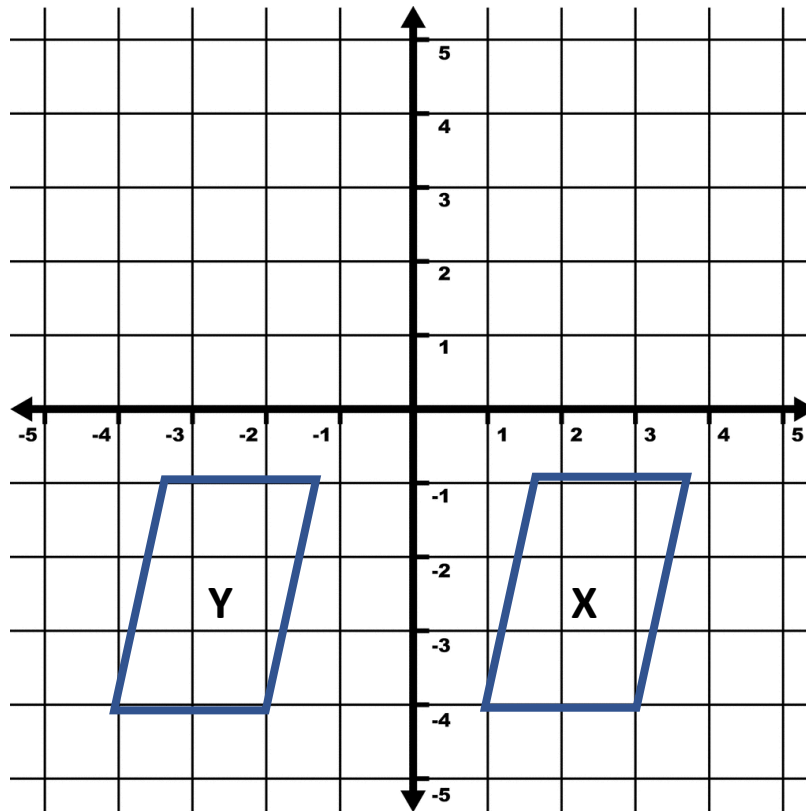
**Now it's your turn!**

If you get stuck, look back at the worked and guided examples.

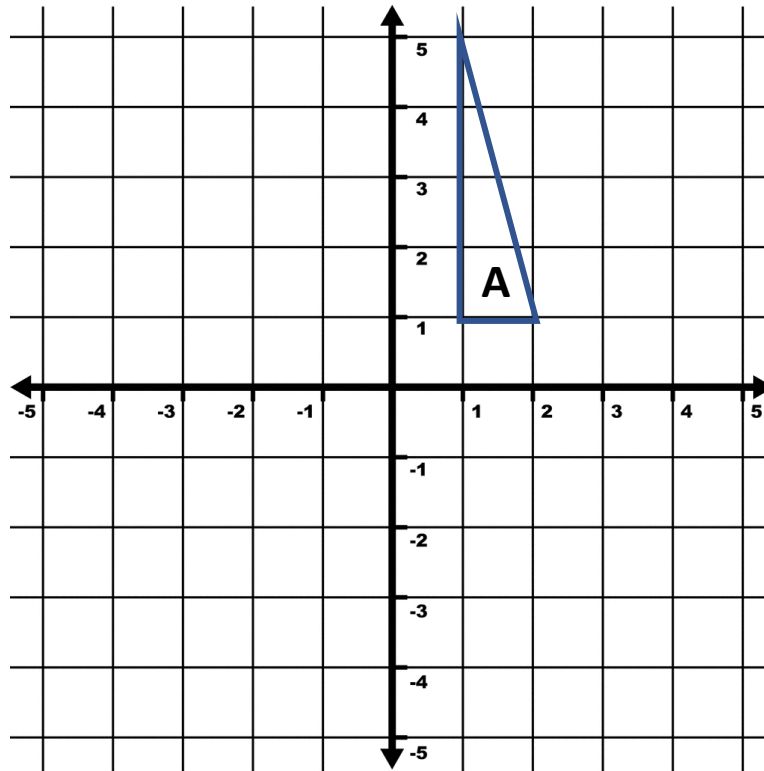
1. Describe the translation of shape P to shape Q as a column vector.



2. Describe the translation of shape X to shape Y as a column vector.



3. Translate shape A by the vector  $\begin{pmatrix} -4 \\ -3 \end{pmatrix}$  and label the new shape B.



4. Translate shape C by the column vector  $\begin{pmatrix} 0 \\ -2 \end{pmatrix}$  and label the new shape D.

